




Solve each problem.


Answers

1) Which letter best shows -37?




1. _____

2) Which letter best shows -21?




2. _____

3) Which letter best shows -114?




3. _____

4) Which letter best shows -10?




4. _____

5) Which letter best shows -27?




5. _____

6) Which letter best shows -21?




6. _____

7) Which letter best shows -39?



7. _____

8) Which letter best shows -13?




8. _____

9) Which letter best shows -55?



9. _____

10) Which letter best shows -27?



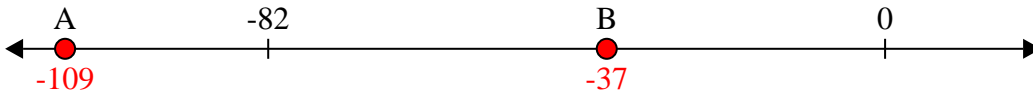
10. _____



Solve each problem.

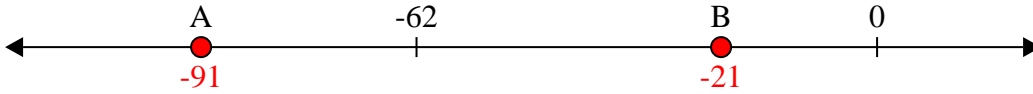
Answers

1) Which letter best shows -37?



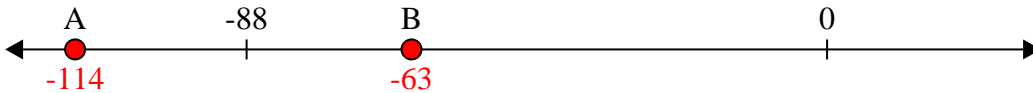
1. **B**

2) Which letter best shows -21?




2. **B**

3) Which letter best shows -114?



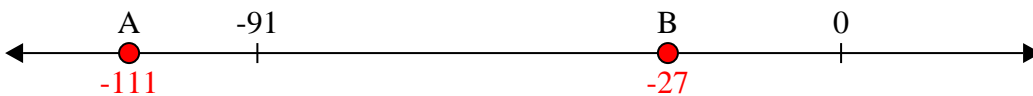
3. **A**

4) Which letter best shows -10?




4. **B**

5) Which letter best shows -27?




5. **B**

6) Which letter best shows -21?



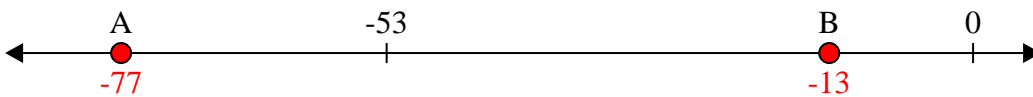
6. **B**

7) Which letter best shows -39?



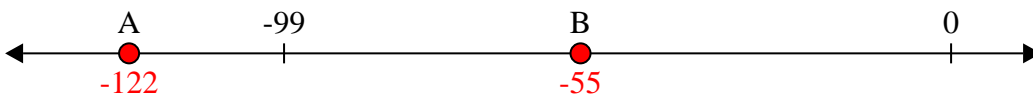
7. **B**

8) Which letter best shows -13?




8. **B**

9) Which letter best shows -55?



9. **B**

10) Which letter best shows -27?



10. **B**